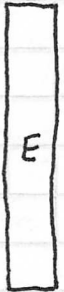
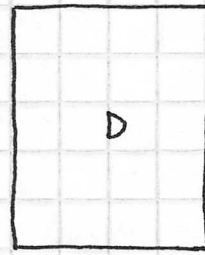
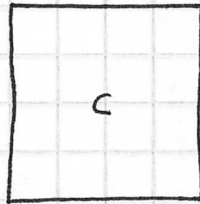




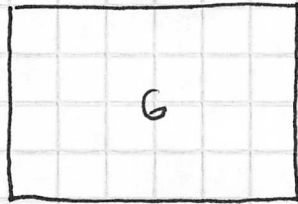
Name \_\_\_\_\_

Put the following rectangles in order from "most square" to "least square" by making a list of their letter names.



\_\_\_\_\_

Where would each of the following fall on your scale?



Describe how you would measure "squareness."